



Cambridge International AS & A Level

GEOGRAPHY

9696/22

Paper 2 Core Human Geography

October/November 2021

INSERT

1 hour 30 minutes

INFORMATION

- This insert contains all the resources referred to in the questions.
- You may annotate this insert and use the blank spaces for planning. **Do not write your answers** on the insert.



This document has 4 pages.

Fig. 1.1 for Question 1

Life expectancy at birth in Kenya, an MIC in Africa, 2000–18

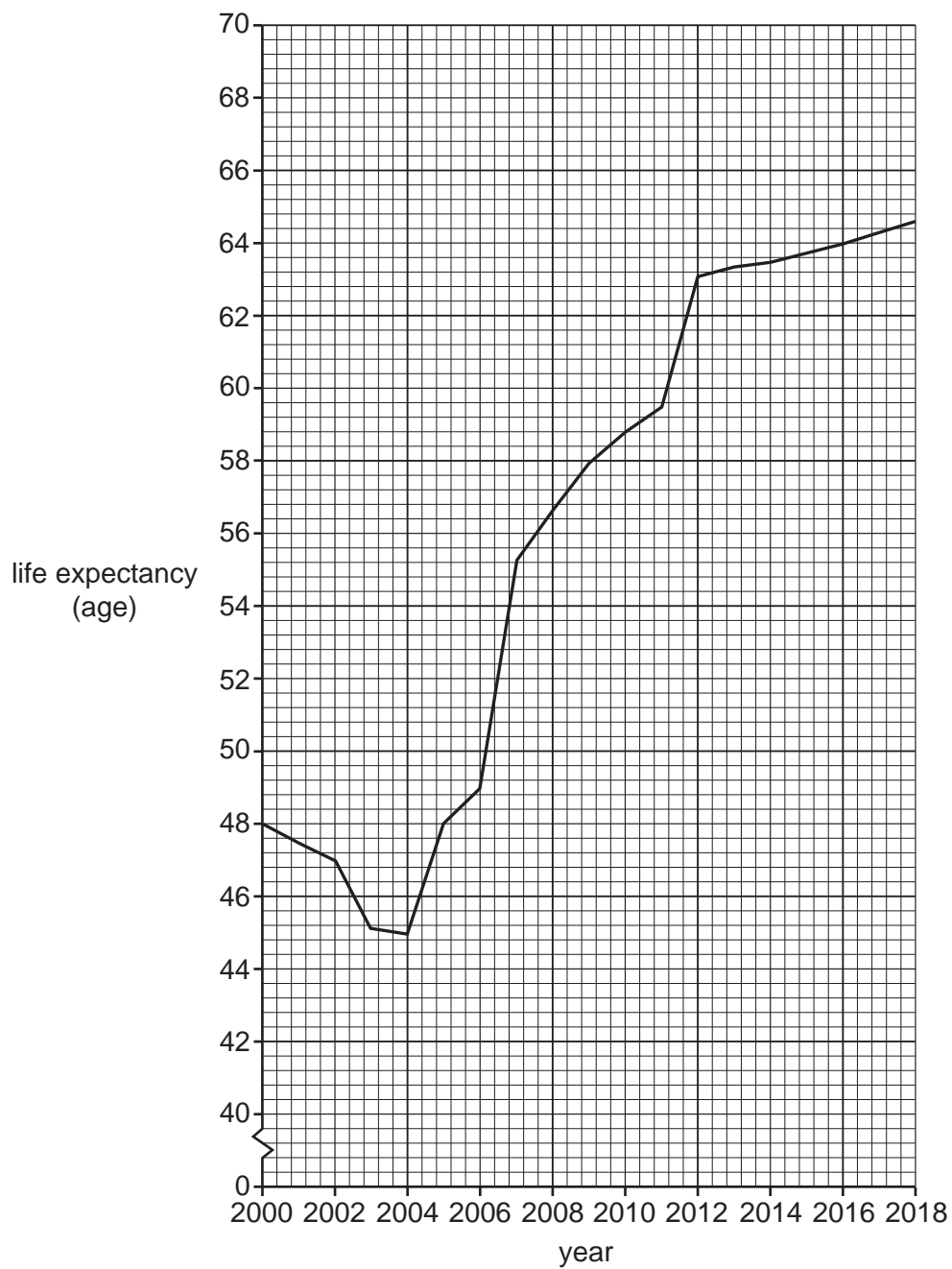
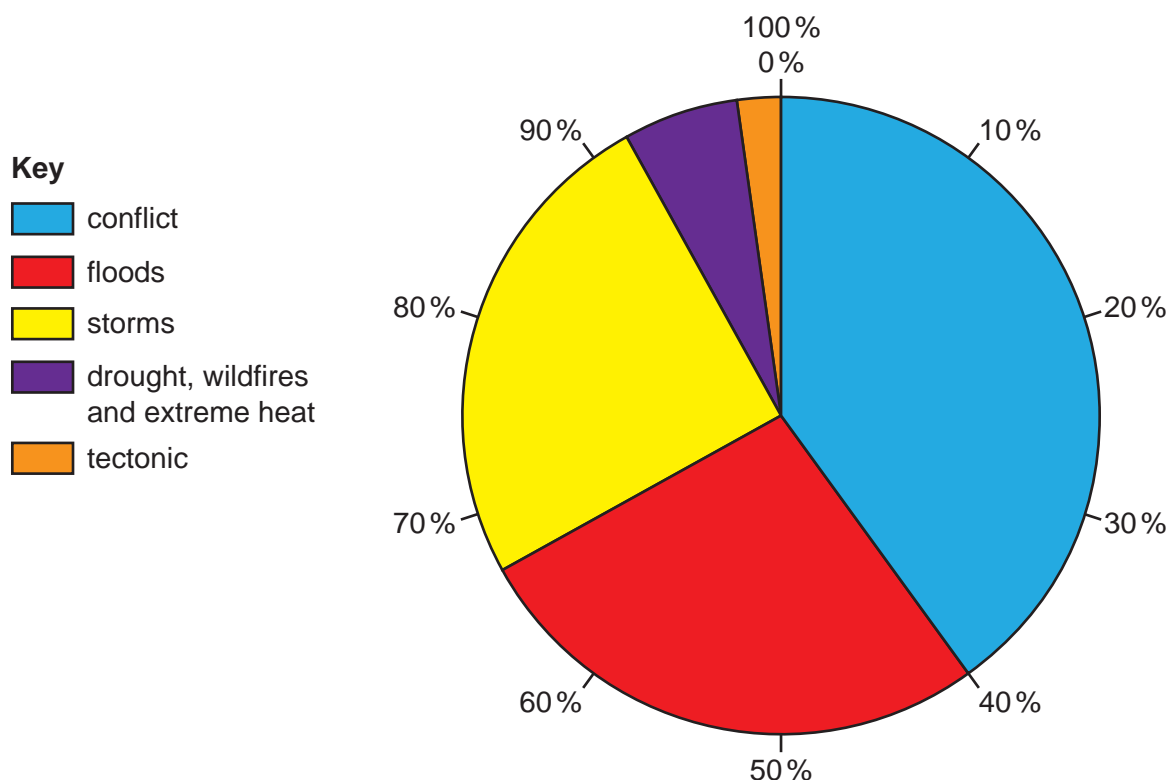


Fig. 2.1 for Question 2

Causes of internal displacements of people in 2017



In 2017, there were 30 million internally displaced people across the world. An internally displaced person is someone who has been forced to flee their home but never crosses an international border.

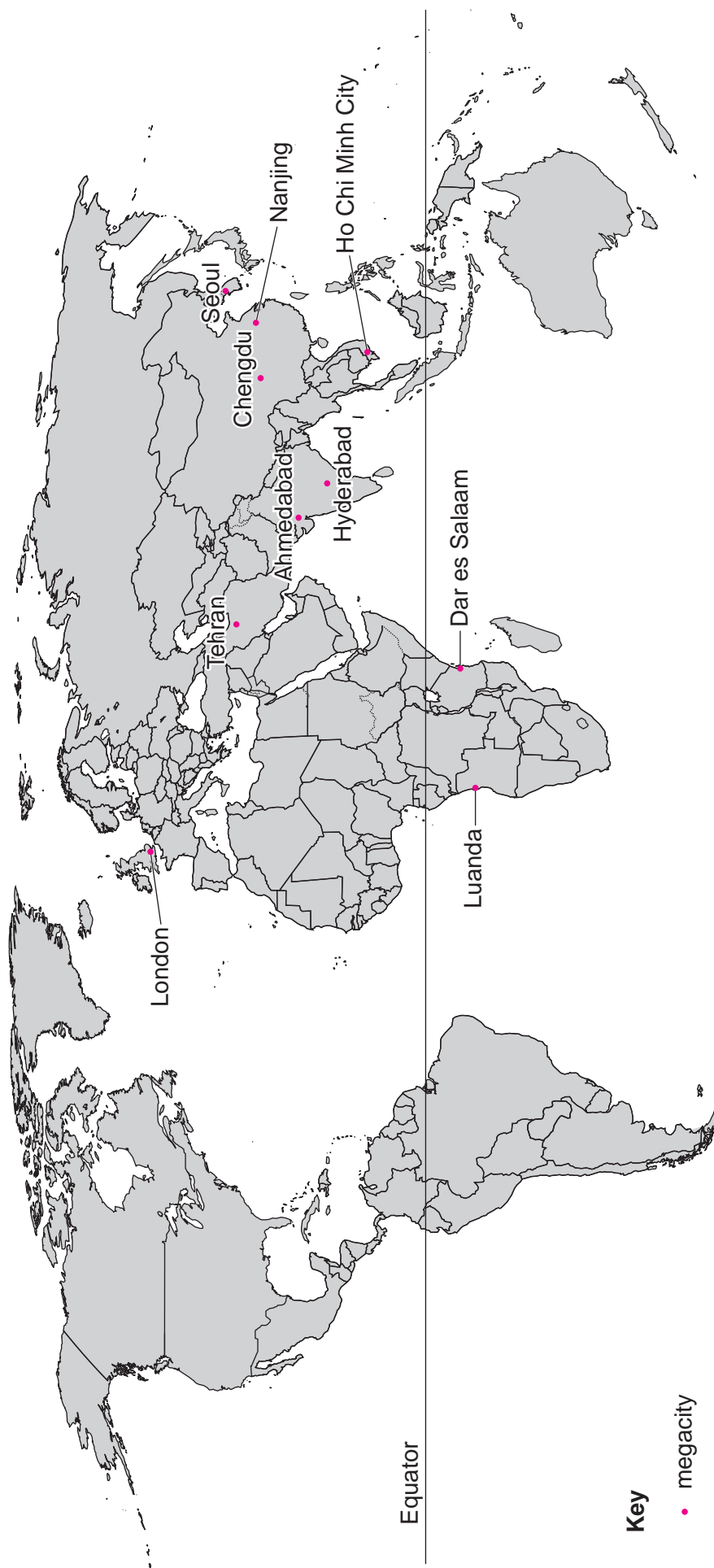
The boundaries and names shown, the designations used and the presentation of material on any maps contained in this question paper/insert do not imply official endorsement or acceptance by Cambridge Assessment International Education concerning the legal status of any country, territory, or area or any of its authorities, or of the delimitation of its frontiers or boundaries.

Permission to reproduce items where third-party owned material protected by copyright is included has been sought and cleared where possible. Every reasonable effort has been made by the publisher (UCLES) to trace copyright holders, but if any items requiring clearance have unwittingly been included, the publisher will be pleased to make amends at the earliest possible opportunity.

To avoid the issue of disclosure of answer-related information to candidates, all copyright acknowledgements are reproduced online in the Cambridge Assessment International Education Copyright Acknowledgements Booklet. This is produced for each series of examinations and is freely available to download at www.cambridgeinternational.org after the live examination series.

Cambridge Assessment International Education is part of the Cambridge Assessment Group. Cambridge Assessment is the brand name of the University of Cambridge Local Examinations Syndicate (UCLES), which itself is a department of the University of Cambridge.

Fig. 3.1 for Question 3
New megacities predicted for 2030



The United Nations (UN) defines a megacity as a city with a population of 10 million or more.